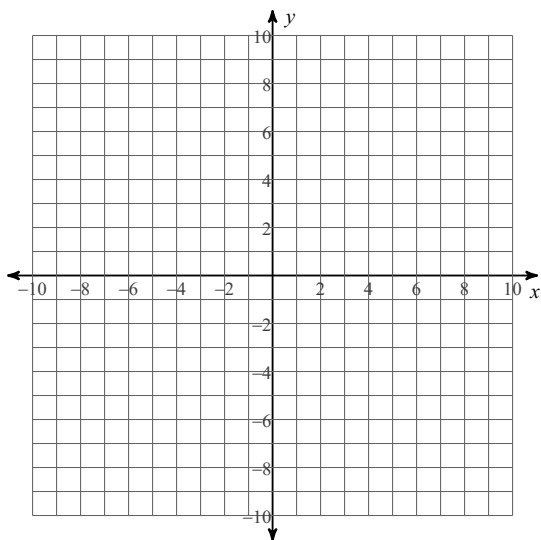


Solve by Graphing - 2nd Chance

Solve each system by graphing.

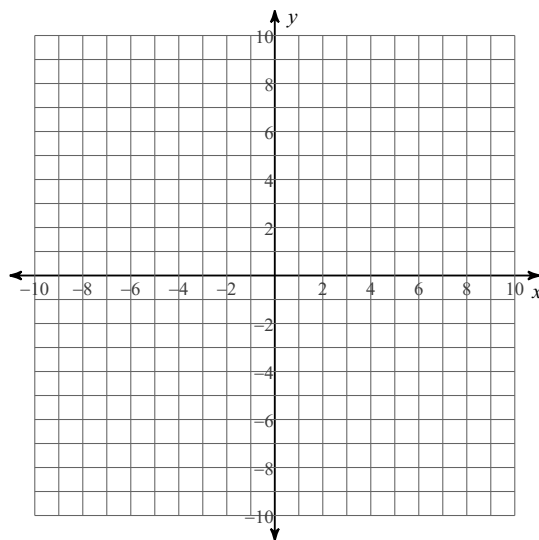
1) $y = -x - 3$

$y = \frac{1}{2}x + 6$



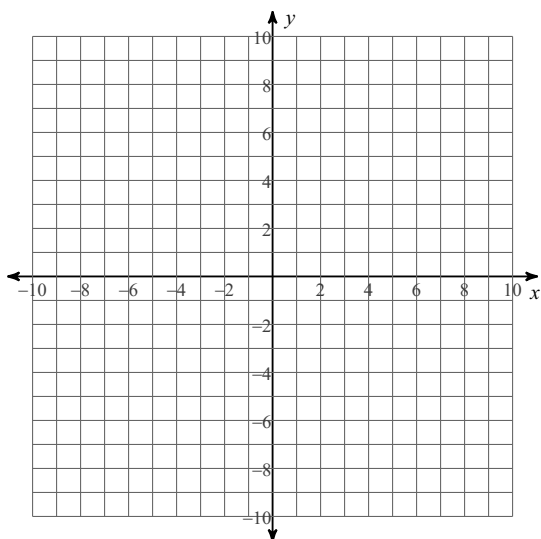
2) $y = -\frac{1}{2}x + 3$

$y = 2x - 7$



3) $y = -x - 5$

$y = -8x + 2$



4) $y = -8$

$y = \frac{13}{5}x + 5$

