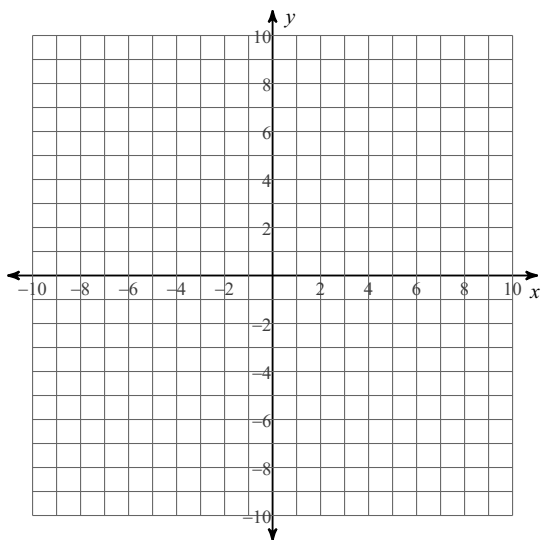


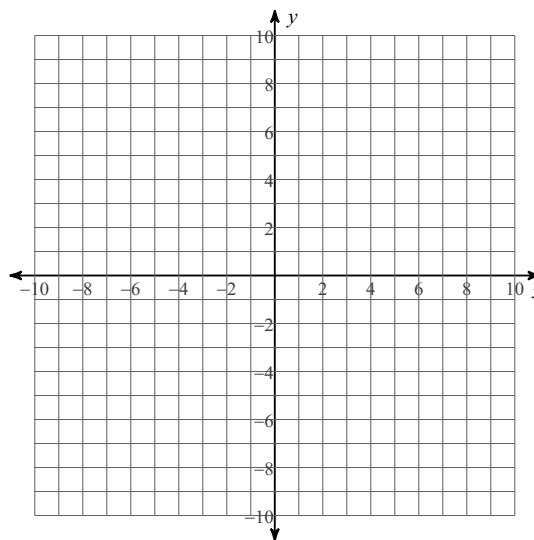
Solve by Graphing

Solve each system by graphing.

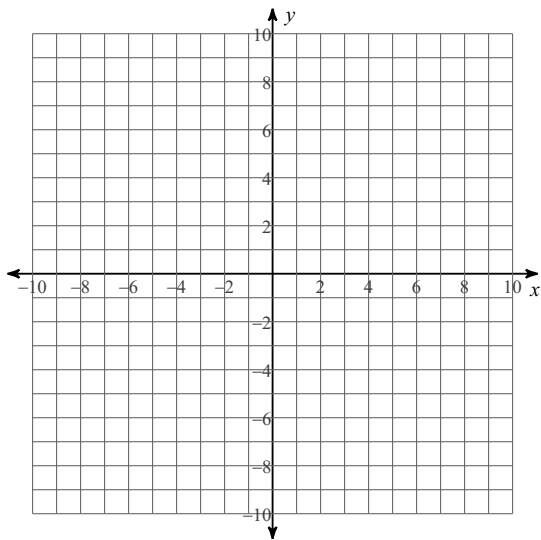
1) $y = -\frac{1}{5}x - 7$
 $x = -5$



2) $y = 2x + 8$
 $y = -\frac{1}{2}x - 7$



3) $y = \frac{3}{7}x - 7$
 $y = -x + 3$



4) $y = 2x + 6$
 $y = -\frac{1}{4}x - 3$

